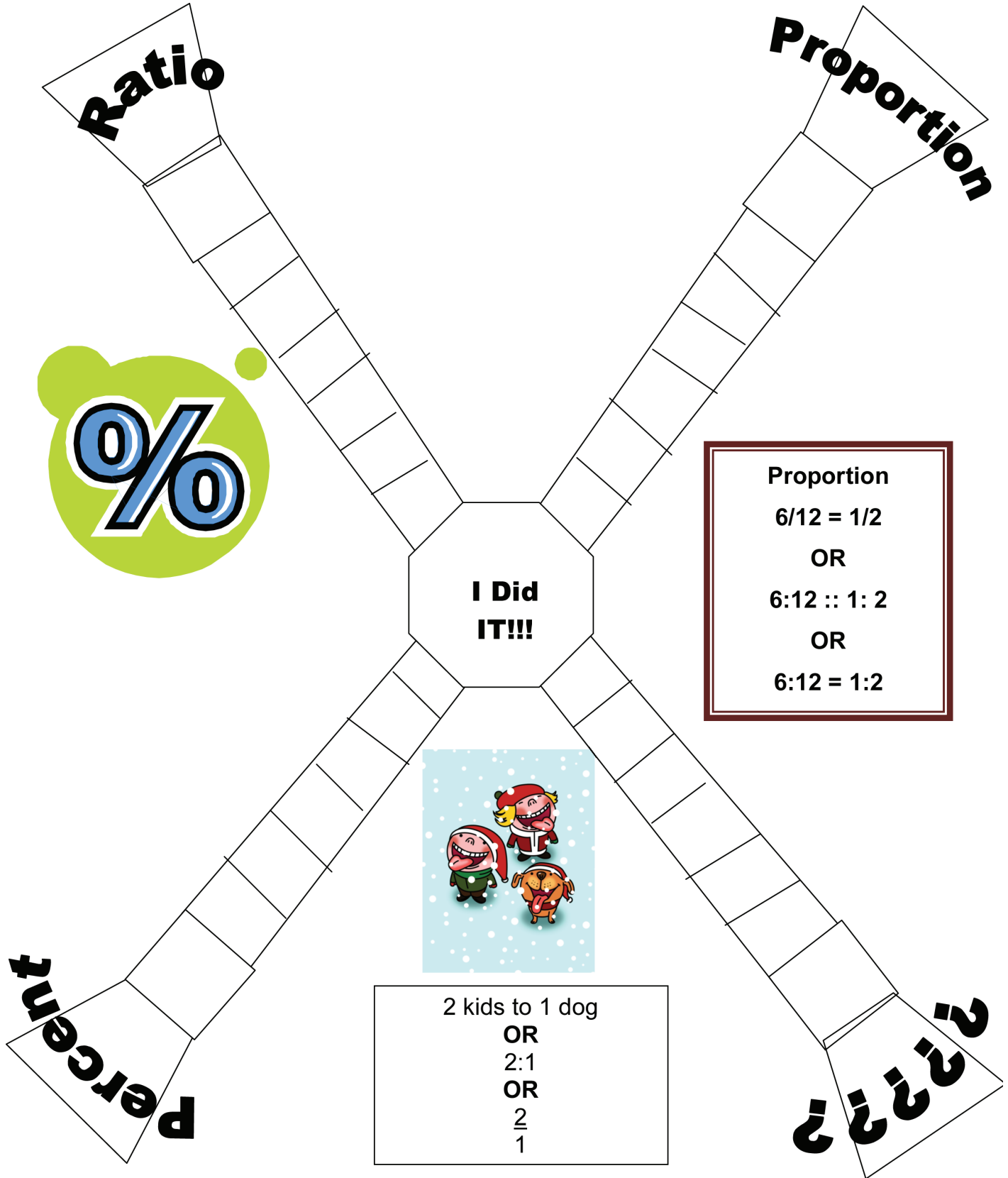





Ratio, Proportion and Percent Board Game



Proportion
 $6/12 = 1/2$
 OR
 $6:12 :: 1:2$
 OR
 $6:12 = 1:2$



2 kids to 1 dog
 OR
 $2:1$
 OR
 $\frac{2}{1}$

<p>1. What is the ratio of circle to stars?</p> 	<p>2. What is the ratio of stars to all shapes?</p> 
<p>3. What is the ratio of lines to circles?</p> 	<p>4. A television screen is 25 cm long and 15 cm wide. What is the ratio of length to width?</p>
<p>5. A television screen is 25 cm long and 15 cm wide. What is the ratio of width to length?</p>	<p>6. A class has 25 students. Fifteen are boys. What is the ratio of girls to boys?</p>
<p>7. A class has 25 students. Fifteen are boys. What is the ratio of boys to all students?</p>	<p>8. $\frac{14}{n} = \frac{7}{4}$</p> <p>What does n equal?</p>
<p>9. A cookie recipe for 60 cookies calls for 4 cups of flour. How much flour is needed to make 90 cookies?</p> <p>Write the proportion that shows this.</p> <p>BONUS: Solve the problem</p>	<p>10. A school has 240 boys in it. The ration of boys to girls is 6 to 5. How many girls are in the school?</p> <p>Write the proportion that solves this.</p> <p>BONUS: Solve the problem</p>

<p>11. In a unit rate the second term or the denominator is always _____.</p> <p>a. 1 b. 2 c. 5 d. 100</p>	<p>12. A car traveled 200 miles on 10 gallons of gas (miles per gallon). What is the unit rate?</p> <p>a. 200/10 b. 10/200 c. 20/1 d. 1/20</p>
<p>13. Your teacher typed 180 words in 4 minutes. (words per minute). What is the unit rate?</p> <p>a. 140/4 b. 4/180 c. 45/1 d. 1/45</p>	<p>14. Write the ratio of 78 out of 780.</p> <p>a. 78/780 b. 780/78 c. 1/10 d. 10/1</p>
<p>15. Your mom cooked 6 eggs for every 2 people. She cooked 18 eggs. How many people. Write the proportion.</p> <p>BONUS: If you solve it too.</p>	<p>16. Write the proportion.</p> <div style="display: flex; justify-content: space-around; align-items: center;"> <div style="text-align: center;"> <p>12" x</p> </div> <div style="text-align: center;"> <p>9" 6"</p> </div> </div>
<p>17. Write the proportion.</p> <div style="display: flex; justify-content: space-around; align-items: center;"> <div style="text-align: center;"> <p>15" 20"</p> </div> <div style="text-align: center;"> <p>x</p> <p>12"</p> </div> </div>	<p>18. What's the percent? 1 to 100</p> <p>a. 1% b. 2% c. 5% d. 100%</p>
<p>19. What's the percent? 75/100</p> <p>a. 3/4 b. 30% c. 75% d. 100%</p>	<p>20. You tossed a coin 100 times. 45 times it was heads. What's the percent of tails?</p> <p>a. 45% b. 55% c. 45/100 d. 9/20</p>



Answers to Ratio, Proportion and Percent Question Set

1. $4/2 = 2/1$
2. $2/9$
3. $3/4$
4. $25/15 = 5/3$
5. $15/25 = 3/5$
6. $10/15 = 2/3$
7. $15/25 = 3/5$
8. $n = 8$
9. $60/4 = 90/n$ Answer is $n = 6$ cups of flour (Proportion set up could vary)
10. $6/5 = 240/n$ Answer is $n = 200$ (Proportion set up could vary)
11. a. 1
12. c. $20/1$
13. c. $45/1$
14. $78/780 = 1/10$
15. $6/2 = 18/x$ Answer is $x = 6$ people (Proportion set up could vary)
16. $12/x = 9/6$ Answer is $x = 8$ " (Proportion set up could vary)
17. $15/20 = x/12$ Answer is $x = 9$ " (Proportion set up could vary)
18. a. 1%
19. c. 75%
20. b. 55%